

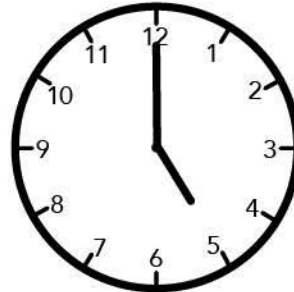
Name _____

Date _____

The Clock — On the hour.


Draw lines to match the different ways of telling the time.

Nine O'clock



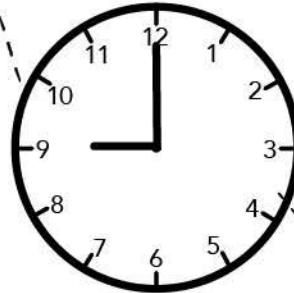
2:00

Two O'clock



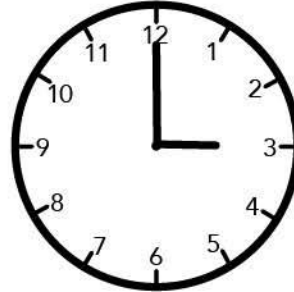
5:00

Five O'clock



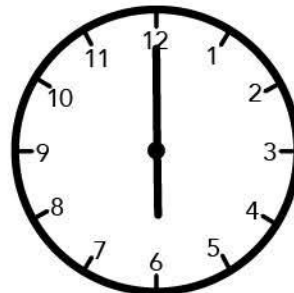
3:00

Three O'clock



9:00

Six O'clock



6:00

